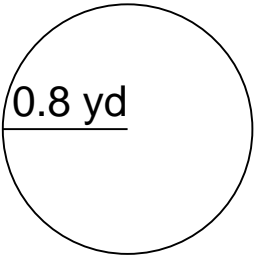


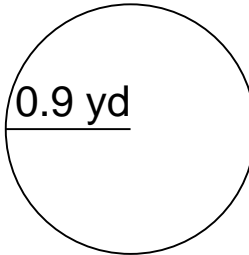


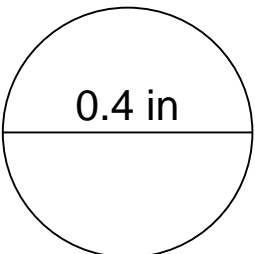
Area and circumference of a circle

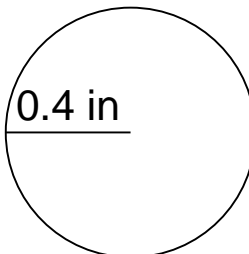
Grade 6 Geometry Worksheet

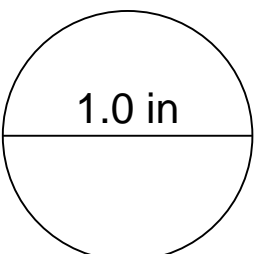
Calculate the area and circumference of each circle.

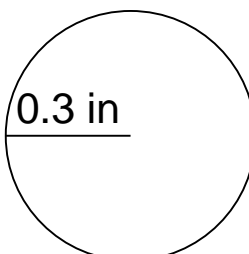
1.  0.8 yd

2.  0.9 yd

3.  0.4 in

4.  0.4 in

5.  1.0 in

6.  0.3 in

I completed this assignment by myself without using a calculator, internet, or any outside help.

Signed: _____

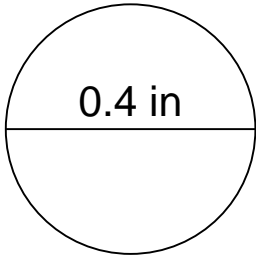


Area and circumference of a circle

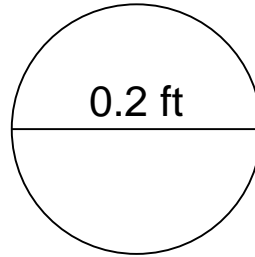
Grade 6 Geometry Worksheet

Calculate the area and circumference of each circle.

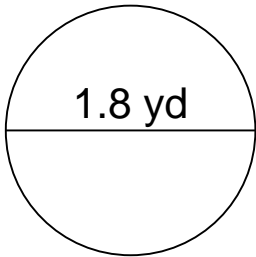
1.



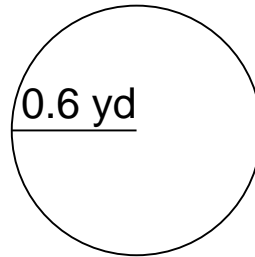
2.



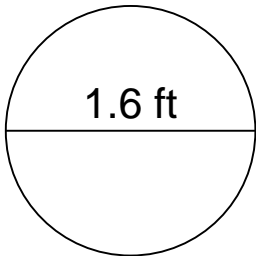
3.



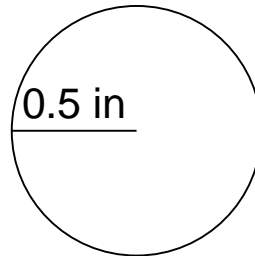
4.



5.



6.



I completed this assignment by myself without using a calculator, internet, or any outside help.

Signed: _____