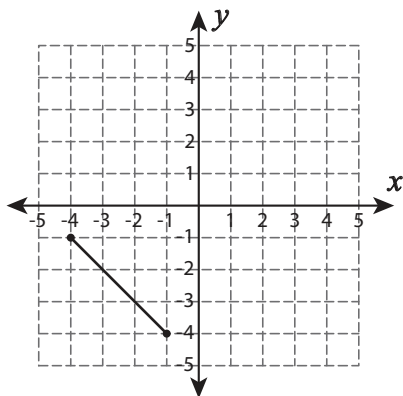


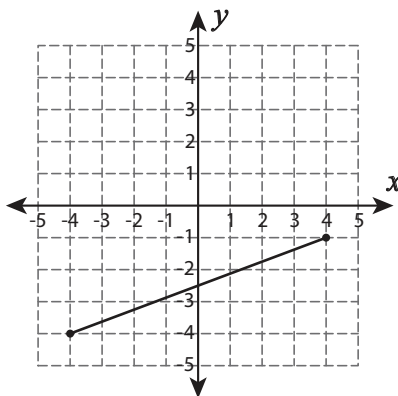
Length of a Line Segment

Find the length of each line segment. Round your answer to two decimal places.

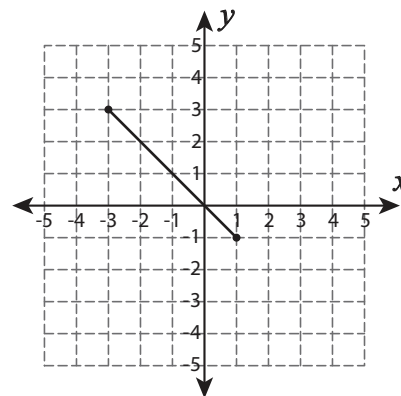
1)



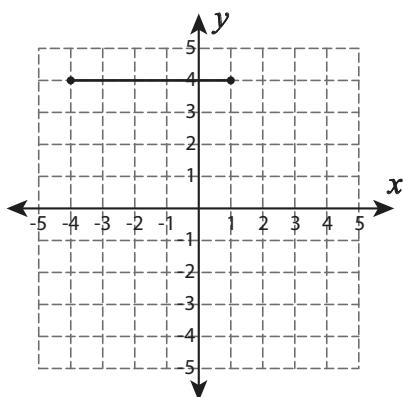
2)



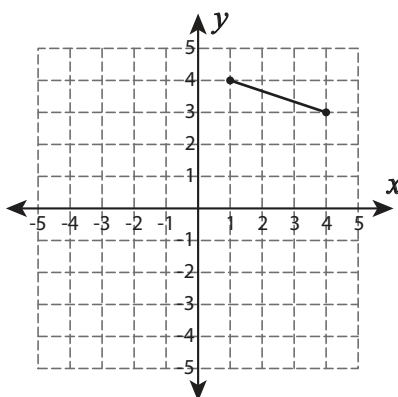
3)



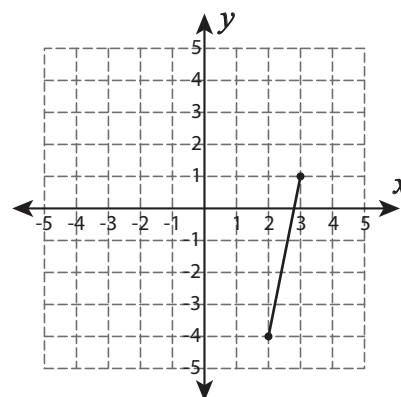
4)



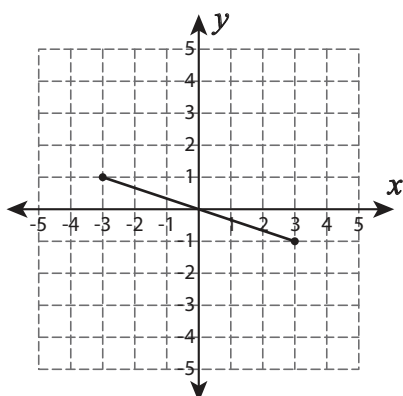
5)



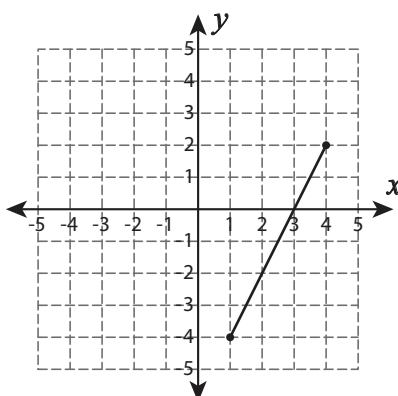
6)



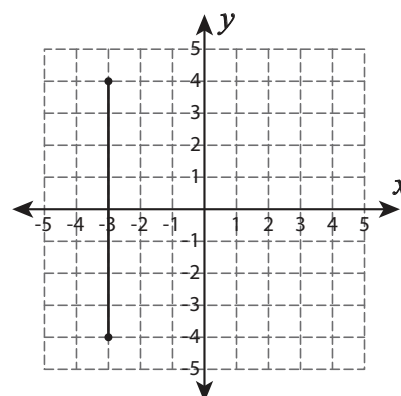
7)



8)



9)



Distance between Two Points

Find the distance between each pair of points. Round your answer to two decimal places.

1) $(-1, -7), (-9, -8)$

2) $(-3, 8), (2, 3)$

3) $(4, 0), (0, 10)$

4) $(2, 8), (-5, 6)$

5) $(-10, -4), (0, 2)$

6) $(7, 5), (-6, -5)$

7) $(-4, 1), (-2, -7)$

8) $(8, -1), (3, -9)$

9) $(9, 6), (6, 10)$

10) $(-4, -9), (3, 1)$